

Day 3: What do you remember?

Yesterday... Which of these
dice is showing a
double?



LO: To find the total of doubles

- I can identify when a number has been doubled and find the total number

Important words to use:
Can you say them in a squeaky voice?

total

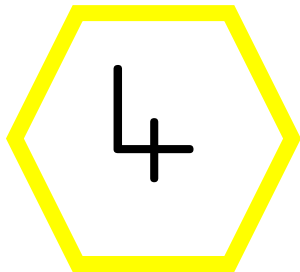

amount

add


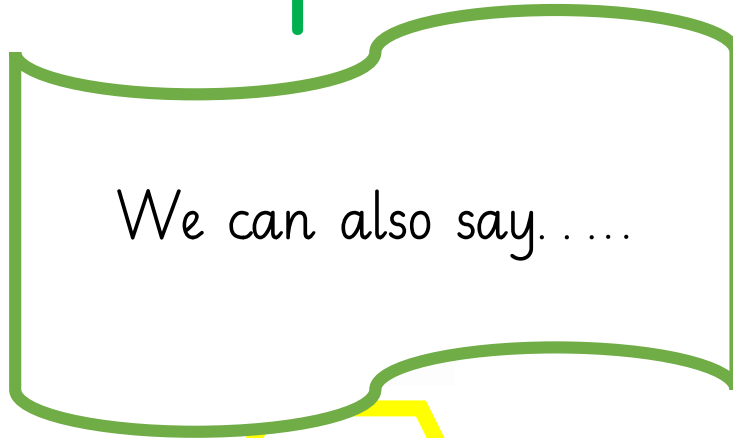
double

Groups of


Have a look at these ladybirds. They show us the same number of dots on each side.
Can you find the TOTAL number of spots?



$$2 + 2 = 4$$



$$4 + 4 = 8$$



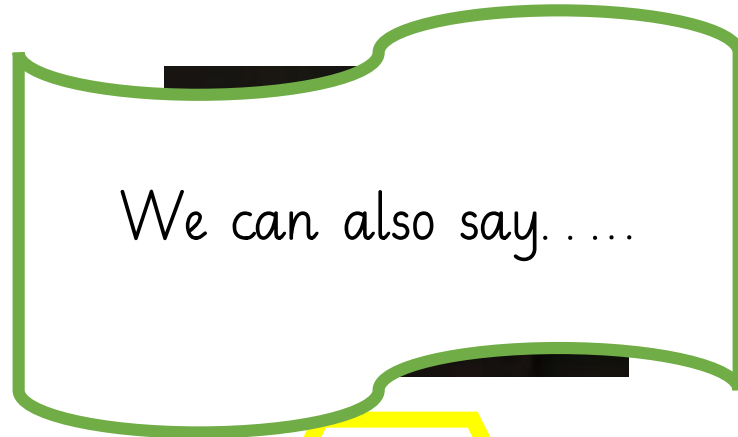
$$3 + 3 = 6$$

Look at these dice. What are the total number of spots on the dice?



12

$$6+6=12$$



2

$$1+1=2$$

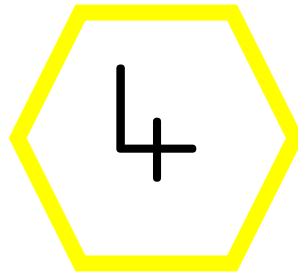


10

$$5+5=10$$

The fairy godmother has 2 ice creams and then waves her wand to make it *double*

What will the total number of ice creams be?




We can also say. . . .

$$2 + 2 = 4$$

The dragon has *5* gold coins to defend, then the giant gives him *5 more* gold coins to defend. How many gold coins does he need to keep safe altogether?

10




We can also say.

$$5 + 5 = 10$$



Challenge



Can you write down and answer
some maths sentences where the
answer is double?