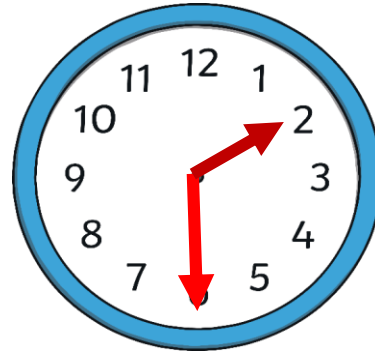


Day 2: What do you remember?

Last Week...

What time does this clock show?



Yesterday...

What does capacity mean?

Important words to use:
Can you say them in a silly voice?

Full

Space

Half full

Empty

Capacity

LO: I can explore different containers capacities

- I know when a container is full
- I can predict how many times it will take to fill a container

Can you work out which bottle of water belongs to Chris and which one is Connors?

I drank half of my water but left half

I haven't drunk any of my water yet!



Have these bottles been placed at the right end of the table?

The bottles are
at the wrong
ends of the
table


most



This bottle has
more inside it so
should be at the
other end of the
table



least



Have these bottles been placed at the right end of the table?


This bottle has
the most
inside!

most



This bottle has
the least inside it
so is at the right
end of the table

least



Chris and Connor have both spilt their coffees! Silly boys! Chris's coffee has *more* than Connor's. Whose coffee is whose?



Connors
coffee



Chris's
coffee





Challenge



Can you find something which is full.
Something which is half full and something
which is empty?